


Grade 1

Math. Activity
Lessons (61- 75)

1-Circle the object that is shorter:-



2-Circle the object that is longer:-




3- Arrange from the shortest to the tallest:-




Five empty rectangular boxes with a horizontal line at the bottom, intended for labeling the animals above.

4- Measure the length of each object:-



5- Choose and Write the suitable relative position:-
(above - up – right – out — below)



1-The dog is -----the kennel.

2- The dog is going -----.




3-The lion is on the ----- of the clown.

4- The cat is ----- the table.

5- The rabbit is ----- the table.



6) Write the suitable ordinal number:-

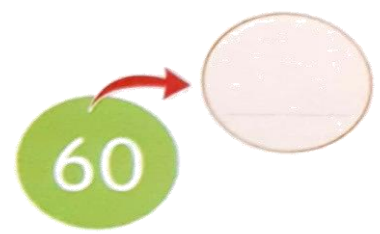


7) Write the number that is 1 more:-

1-



2-



3-



4-




8) Write the number that is 1 less:-

1-



2-



3-





4-




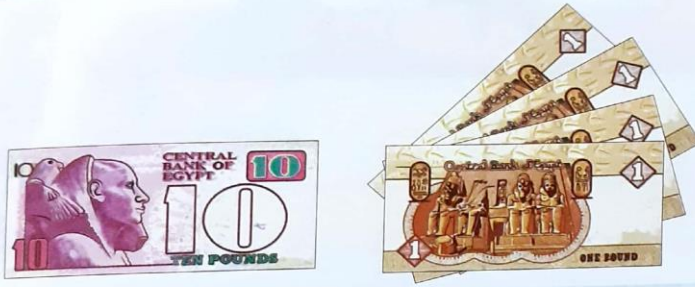
9) Write the amount of each group:-

a)




L.E.

b)




L.E.

c)



L.E.

d)



L.E.

10) Write tens and ones:-

a)

98



tens	ones
_____	_____

b)

33



tens	ones
_____	_____

c)

5



tens	ones
_____	_____

11) Write the number:-

a)

tens	ones
1	5



b)

tens	ones
4	6



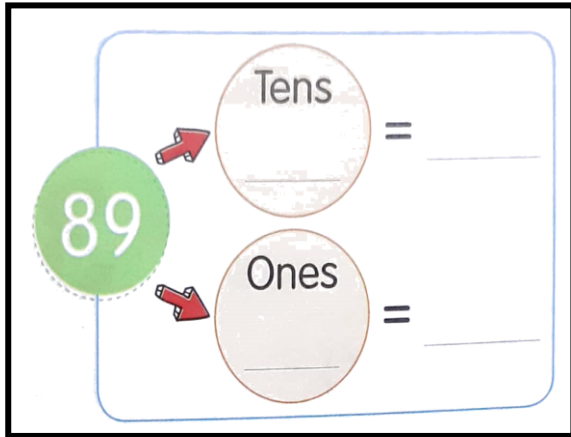
c)

tens	ones
8	0

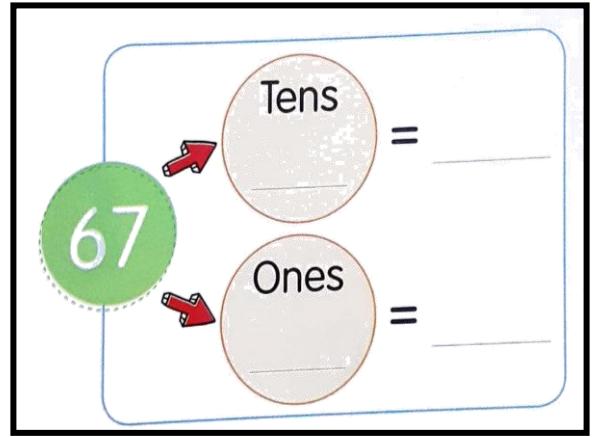


12) Complete:-

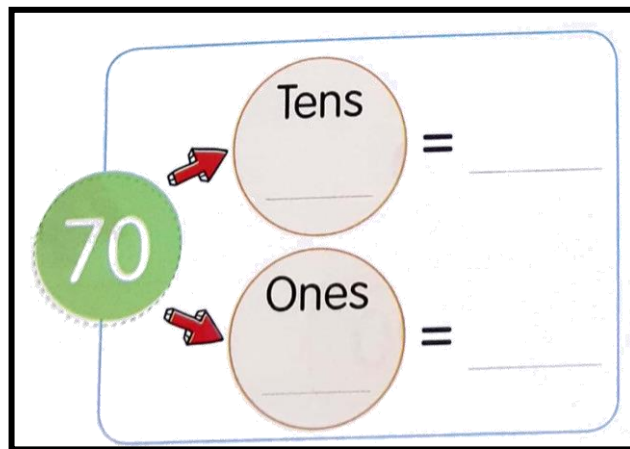
a)



b)



c)



13) Write the place value of the digit 5 :-

56	35	50	5	15

14) Circle the value of the blue digit:-

57
5 or 50

38
8 or 80

19
9 or 90

83
8 or 80

Answer Key

1-flower 2- book 3- a- d -b -e - c 4 - a) 3 b) 5

5 -)1-out 2- up 3-right 4- below 5-above

6) the fifth – the fourth – the third – the second – the first

7) 1- 23 2- 61 3- 82 4- 67

8) 1- 43 2- 58 3- 30 4- 18

9) a- 36 LE b) 14LE c) 50 LE d) 30LE

10) a- 9 tens + 8 ones b- 3 tens +3 ones

c- 0 tens + 5 ones

11) a- 15 b- 46 c- 80

12) a- 8 tens = 80 b- 6 tens= 60 c- 7 tens= 70
9 ones = 9 7 ones = 7 0 ones=0

13)

56	35	50	5	15
tens	ones	tens	ones	ones


14) 50 - 8 - 9 - 80

Videos:

1) Prepositions:



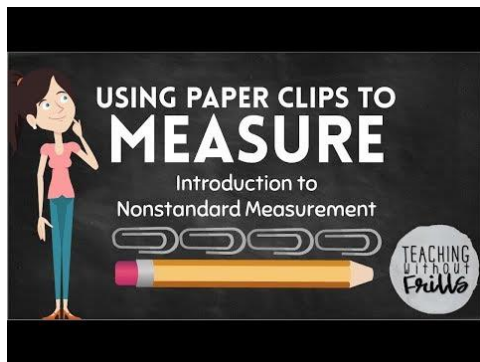
2) Longer or shorter:



3) Greater than, less than symbols.



4) Measurement



5) Place value:




6) One more, One less:



7) Count numbers in tens and ones:



8) Tens and ones.



9) Tens and ones ,Numbers 40-49.

